

1. Identify these common parts on circuit boards:



a: _____



b: _____




c: _____



d: _____



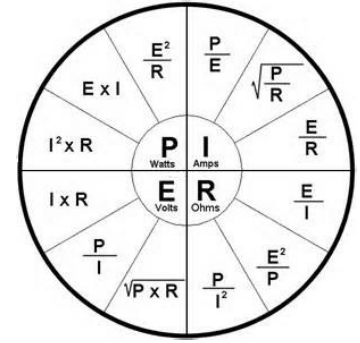
e: _____



f: _____



g: _____



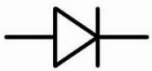
2. Identify the following schematic symbols:



a: _____



f: _____



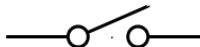
b: _____



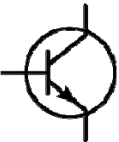
g: _____



c: _____



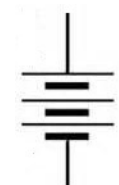
h: _____



d: _____



i: _____



e: _____

